

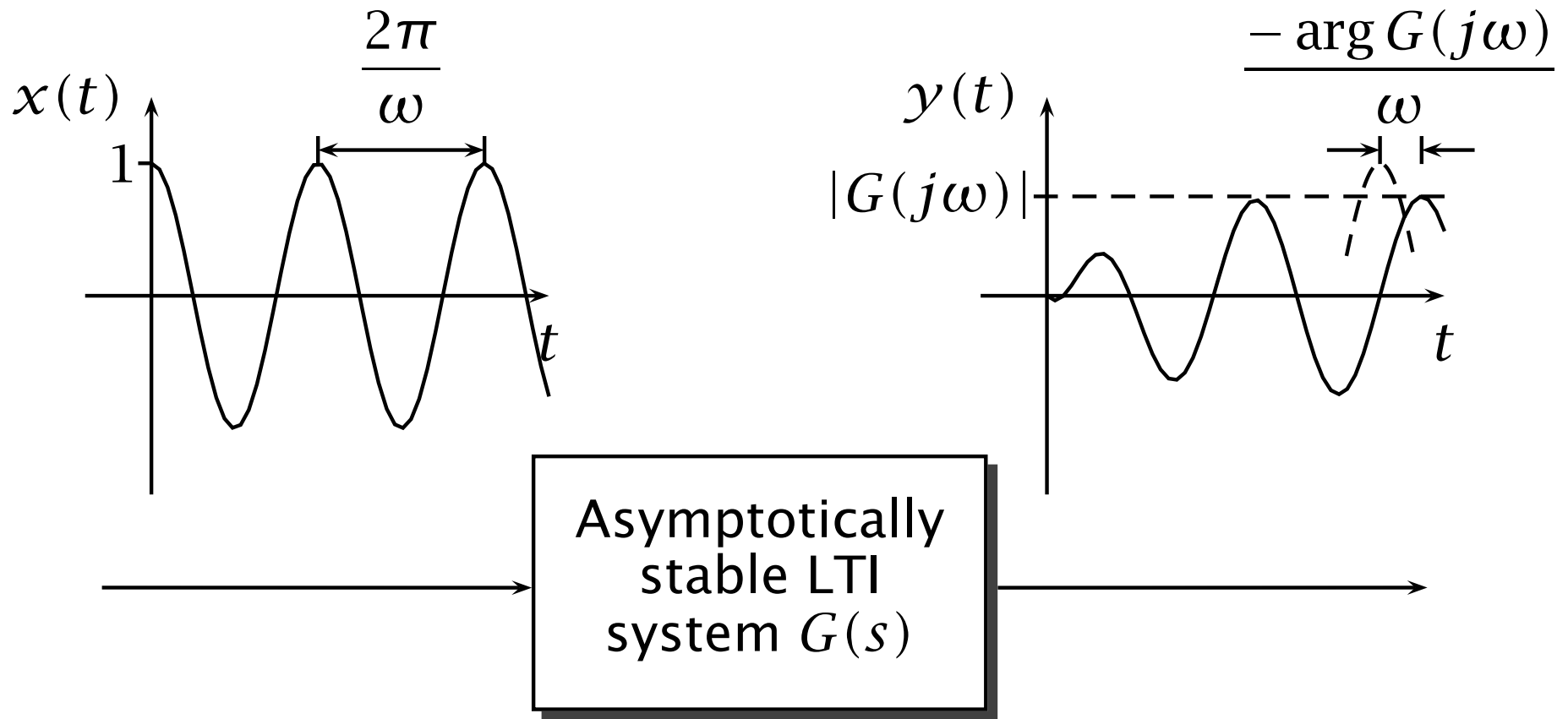
**Part IB Paper 6: Information Engineering**

**LINEAR SYSTEMS AND CONTROL**

**Glenn Vinnicombe**

**HANDOUT 4**

**“The Frequency Response  $G(j\omega)$ ”**



$$x(t) = \cos(\omega t)$$

$$y(t) = |G(j\omega)| \cos(\omega t + \arg G(j\omega))$$

+ starting transient

# Summary

If a pure sinusoid is input to an asymptotically stable LTI system, then the output will also settle down, eventually, to a pure sinusoid. This *steady-state* output will have the same frequency as the input but be at a different amplitude and phase. The dependence of this amplitude and phase on the frequency of the input is called the *frequency response* of the system.

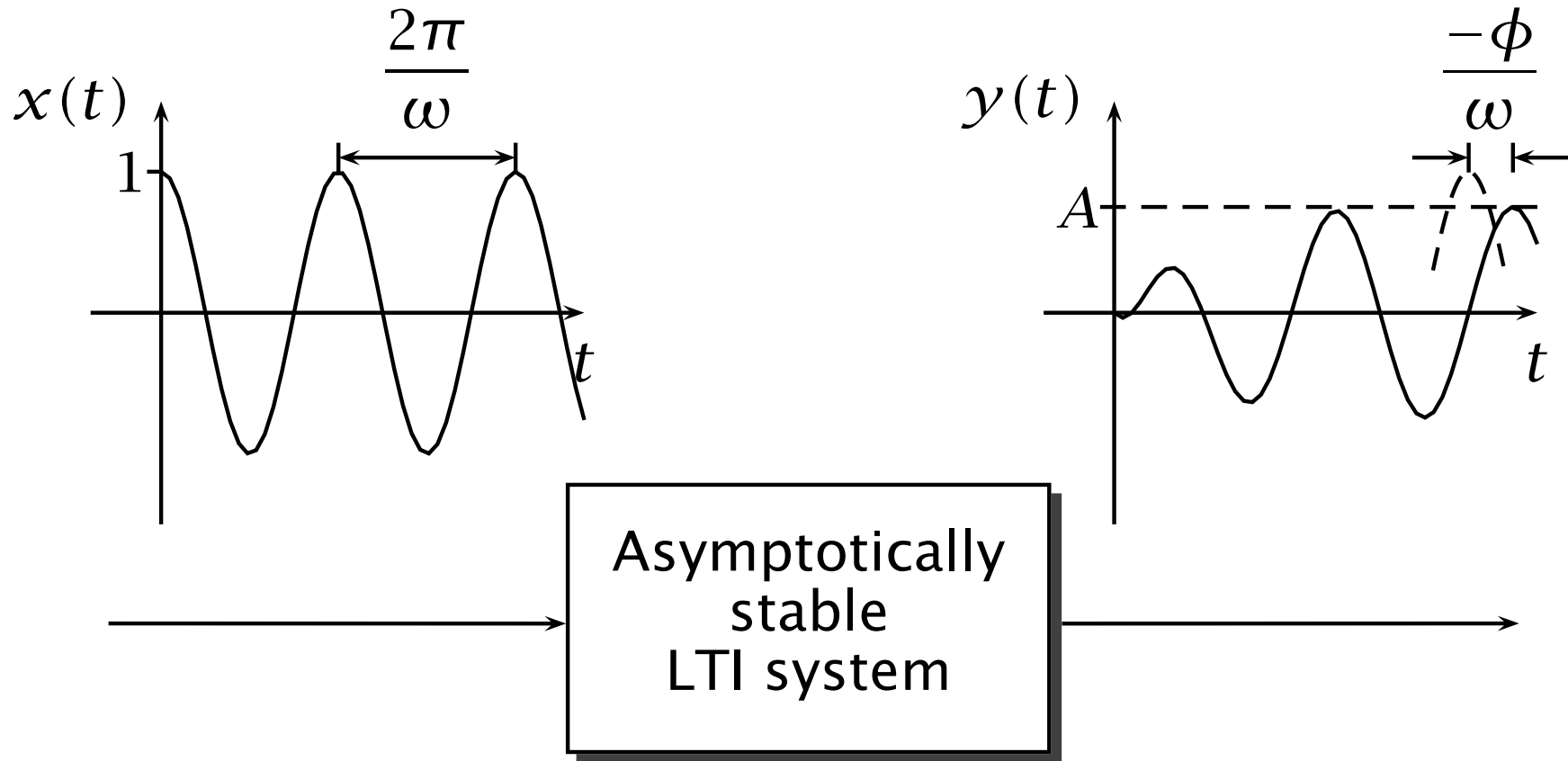
In this handout we shall:

- Show how the frequency response can be derived from the transfer function.  
(by substituting  $j\omega$  for  $s$ )
- Study how the frequency response can be represented graphically.  
(using the Bode diagram)

# Contents

<b>4</b>	<b>The Frequency Response <math>G(j\omega)</math></b>	<b>1</b>
4.1	What is the Frequency Response? . . . . .	3
4.1.1	Derivation of gain and phase shift . . . . .	6
4.2	Plotting the frequency response . . . . .	8
4.3	Sketching Bode Diagrams . . . . .	11
4.3.1	Powers of $s$ : $(sT)^k$ . . . . .	12
4.3.2	First Order Terms: $(1 + sT)$ . . . . .	13
4.3.3	Second order terms: $(1 + 2\zeta sT + s^2 T^2)$ . . . . .	15
4.3.4	Examples . . . . .	17
4.4	Key Points . . . . .	25

# 4.1 What is the Frequency Response?



$$x(t) = \cos(\omega t)$$

$$y(t) = A \cos(\omega t + \phi) \\ + \text{starting transient}$$

If the input to an asymptotically stable LTI system is a pure sinusoid then the steady state output will also be a pure sinusoid, of the same frequency as the input but at a different amplitude and phase.

How do we find  $A$ , the **gain** , and  $\phi$ , **the phase shift** ?

**How does this relate to Part IA?** Consider again a system with input  $u$  and output  $y$ , If

$$\frac{d^2 y}{dt^2} + \alpha \frac{dy}{dt} + \beta y = a \frac{du}{dt} + bu.$$

then we can use the usual trick, letting

$$u = e^{j\omega t}$$

so that

$$\Re(u(t)) = \cos(\omega t).$$

We will find the response to the input  $\cos(\omega t)$  by taking the real part of  $y$ , the response to  $u = e^{j\omega t}$ .

To find the solution  $y$ , we assume it takes the form

$$y(t) = Y e^{j\omega t} \tag{4.1}$$

for some complex number  $Y = |Y| e^{j \arg Y}$ , so that

$$\Re(y(t)) = \Re(|Y| e^{j \arg Y} e^{j\omega t}) = |Y| \cos(\omega t + \arg Y).$$

Substituting (4.1) into the differential equation, and noting that

$$\frac{dy}{dt} = [j\omega]Y e^{j\omega t}, \quad \frac{d^2y}{dt^2} = [j\omega]^2 Y e^{j\omega t}, \quad \text{etc}$$

we obtain

$$Y[j\omega]^2 e^{j\omega t} + \alpha Y[j\omega] e^{j\omega t} + \beta Y e^{j\omega t} = a[j\omega] e^{j\omega t} + b e^{j\omega t}$$

or

$$Y = \frac{a[j\omega] + b}{[j\omega]^2 + \alpha[j\omega] + \beta}$$

Note that the transfer function from  $\bar{u}(s)$  to  $\bar{y}(s)$  is given by

$$G(s) = \frac{as + b}{s^2 + \alpha s + \beta}$$

So, it would appear that  $Y = G(j\omega)$ , suggesting:

ANSWER: If system has the transfer function  $G(s)$ , then

$$A = |G(j\omega)|, \quad \phi = \mathbf{arg} G(j\omega)$$



*You've done this in Linear Circuits, Maths and Mechanical Vibrations in Part IA, so I'm assuming that you are familiar with these arguments! The notation above is as used in Maths and Mechanical Vibrations. In Linear Circuits  $\tilde{y}$  was used to represent a complex phasor, rather than the  $Y$  above.*

**Example:**The **Capacitor** is described by the differential equation

$$i = C \frac{dv}{dt}$$

so  $\bar{i}(s) = Cs\bar{v}(s)$  in the absence of initial conditions giving the transfer function

$$\frac{\bar{v}(s)}{\bar{i}(s)} = \frac{1}{sC}.$$

So, the frequency response of a capacitor (from current to voltage) is  $\frac{1}{j\omega C}$ , which equals its impedance,  $\tilde{v}/\tilde{i}$ . The advantage of transfer functions is that they define the response to all possible inputs, whereas the impedance is only valid for sinusoidal (ac) signals.



## 4.1.1 Derivation of gain and phase shift

The previous argument is not the whole story though - we have assumed that the input  $u = \cos(\omega t)$  has been present since the beginning of time, and have only shown that  $y = A \cos(\omega t + \phi)$  is a *possible* response. What if the system is at rest until  $t = 0$ , and then a sinusoid is applied? Take an *asymptotically stable* system with input  $\bar{u}(s)$  output  $\bar{y}(s)$  and rational transfer function  $G(s) = \frac{n(s)}{d(s)}$ , so

$$\bar{y}(s) = G(s)\bar{u}(s).$$

Let  $u(t) = e^{j\omega t}$ , so  $\bar{u}(s) = \frac{1}{s-j\omega}$  then, since  $G(s)$  can't have a pole at  $s = j\omega$ ,

$$\bar{y}(s) = G(s) \frac{1}{s-j\omega} = \frac{\lambda_1}{s-p_1} + \frac{\lambda_2}{s-p_2} + \dots + \frac{\lambda_n}{s-p_n} + \frac{G(j\omega)}{s-j\omega}$$

$$y(t) = \underbrace{\lambda_1 e^{p_1 t} + \lambda_2 e^{p_2 t} + \dots + \lambda_n e^{p_n t}}_{y_{\text{tr}} (= \text{CF})} + \underbrace{G(j\omega) e^{j\omega t}}_{y_{\text{ss}} (= \text{PI})}$$

(with the obvious modifications if any poles are repeated). Since all the  $p_k$ , the poles of  $G(s)$ , have a negative real part, then  $y_{\text{tr}}(t) \rightarrow 0$  as  $t \rightarrow \infty$  – leaving the steady-state response  $y_{\text{ss}}$ . The steady-state response to the input  $u(t) = \cos(\omega t)$  is given by the real part of this:

$$\begin{aligned}\Re(y_{\text{ss}}(t)) &= \Re\left(e^{j\omega t} G(j\omega)\right) \\ &= \Re\left(|G(j\omega)| e^{j(\omega t + \arg G(j\omega))}\right) \text{ as } z = |z| e^{j \arg z} \\ &= \underbrace{|G(j\omega)|}_A \cos(\omega t + \underbrace{\arg G(j\omega)}_\phi)\end{aligned}$$

## Example:

Consider a system with transfer function

$$G(s) = \frac{1}{s^2 + 0.1s + 2}$$

and an input

$$x(t) = \cos(0.5t)$$

(a sinusoid at 0.5rad/s, or  **$0.5 / (2\pi) = 0.0796$  Hz** )

So,  $\omega = 0.5$  and

$$\begin{aligned} G(j\omega) &= \frac{1}{(0.5j)^2 + 0.1(0.5j) + 2} = \frac{1}{-0.25 + 0.05j + 2} \\ &= \frac{1}{1.75 + 0.05j} = \frac{1}{1.7507e^{0.0286j}} = 0.571e^{-0.0286j} \\ &= \mathbf{0.571 \angle -1.64^\circ} \end{aligned}$$

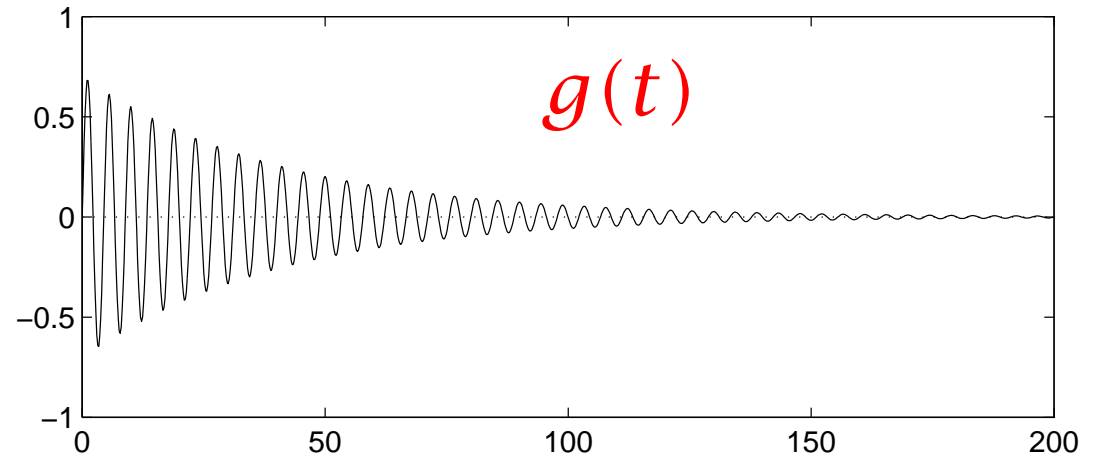
The following figures show the impulse response of this system, the input  $x(t) = \cos(0.5t)$ , and the response to this input.

Note how the output initially contains a component near the resonant frequency of the system  $\omega_n = \sqrt{2}$  (0.225 Hz) but that this quickly decays leaving only a sinusoid at the frequency of the input  $\omega = 0.5$  (0.08 Hz) (and at an amplitude of 0.571).

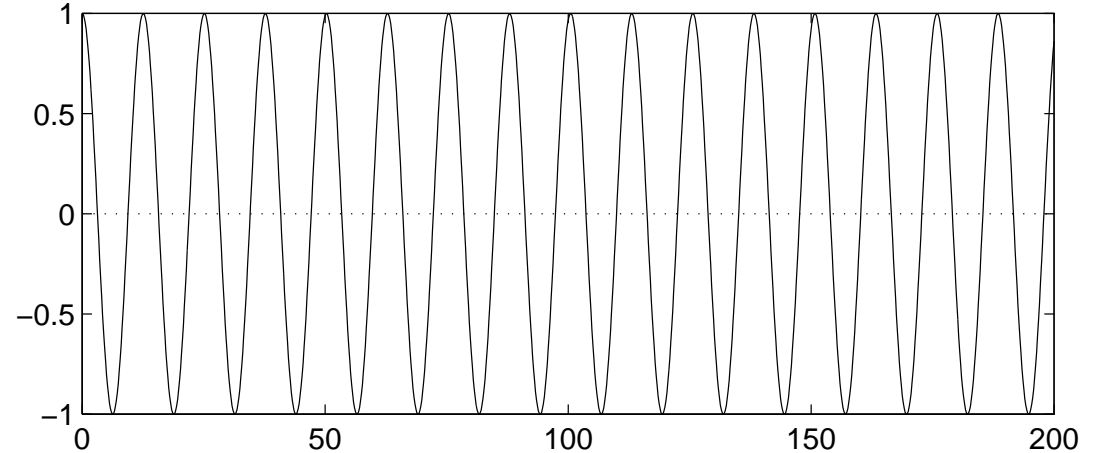
*(The phase lag of  $1.64^\circ$  is too small to be seen on this diagram)*

**0.571**

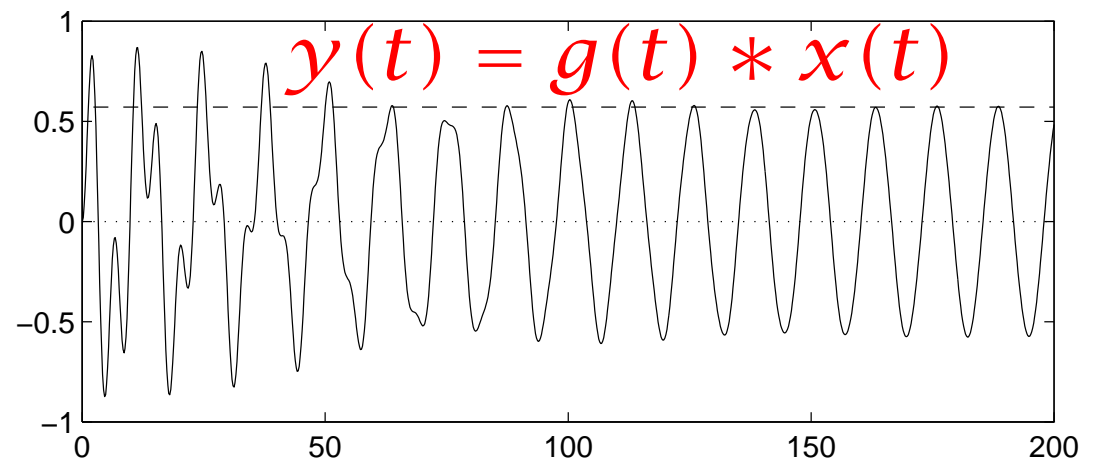
$$G(s) = 1 / (s^2 + 0.1s + 2)$$



$$\text{Input: } x(t) = \cos(0.5 t)$$



$$\text{Response to the input } x(t) = \cos(0.5 t)$$



$t$  (sec)

## 4.2 Plotting the frequency response

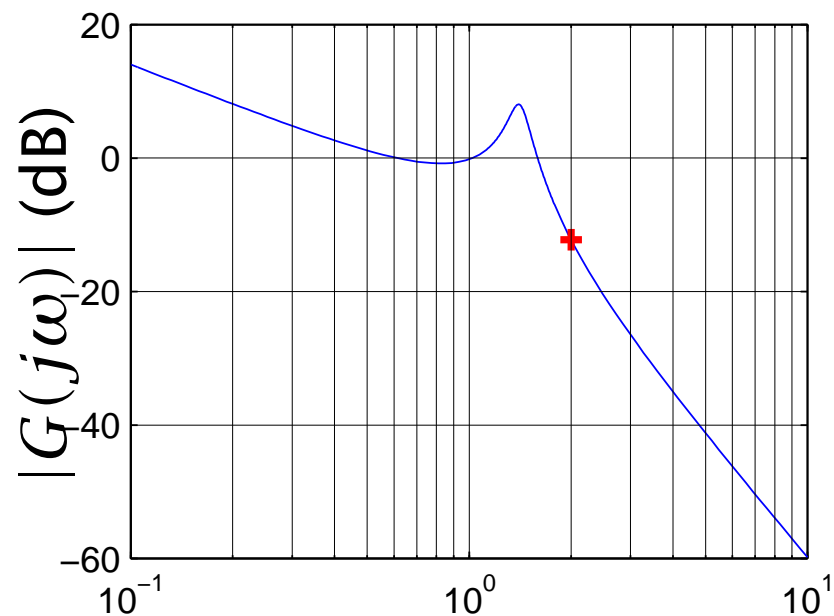
The frequency response  $G(j\omega)$  is a *complex-valued* function of frequency  $\omega$ . At each frequency  $\omega$ , the complex number  $G(j\omega)$  can be represented either in terms of its real and imaginary parts, or in terms of its gain (magnitude) and phase (argument).

There are a number of common ways of representing this information graphically:

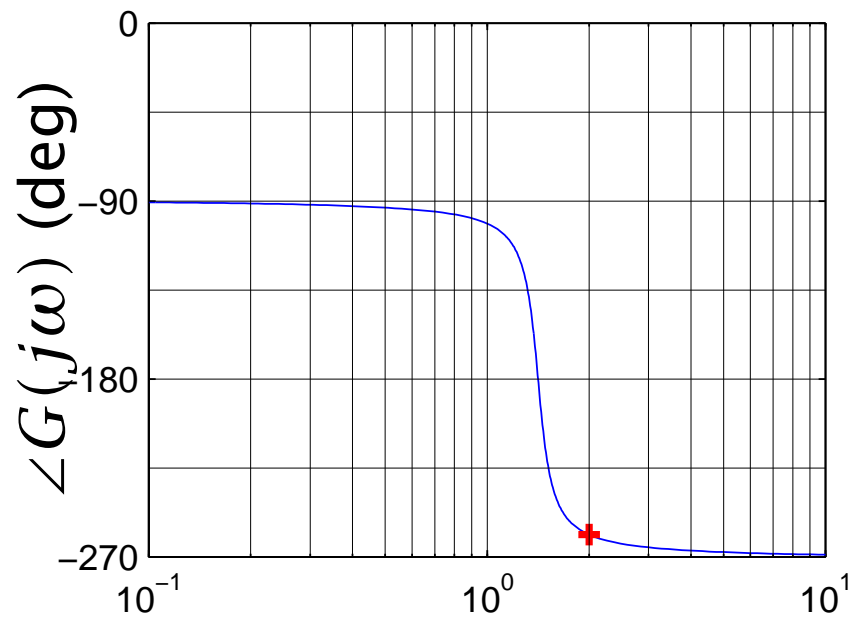
- The **Bode** Diagram: Two separate graphs, one of  $|G(j\omega)|$  vs  $\omega$  (on log-log axes), and one of  $\angle G(j\omega)$  (lin axis) vs  $\omega$  (log axis).
- The **Nyquist** Diagram: One single parametric plot, of  $\Re(G(j\omega))$  against  $\Im(G(j\omega))$  (on linear axes) as  $\omega$  varies.
- The **Nichols** Diagram: One single parametric plot, of  $|G(j\omega)|$  (log axis) against  $\angle(G(j\omega))$  (lin axis) as  $\omega$  varies.

Example:  $G(s) = \frac{1}{s(s^2 + 0.2s + 2)}$

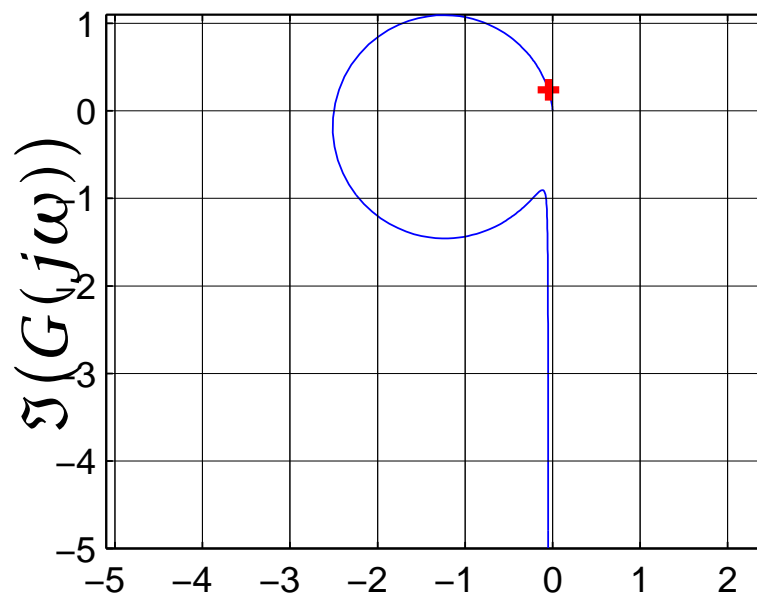
Bode Gain Plot



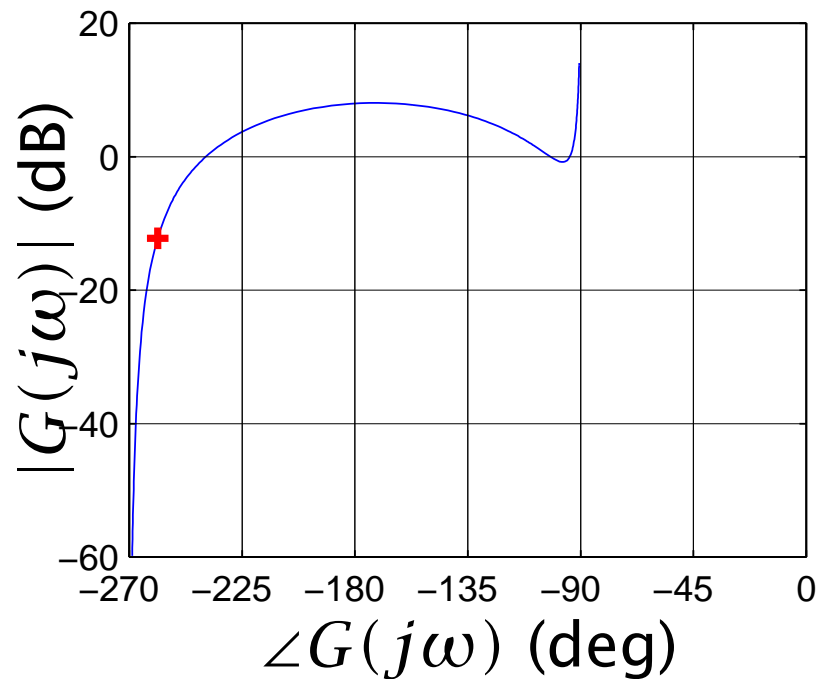
Bode Phase Plot



Nyquist Diagram



Nichols Chart





Each has its use:

The **Bode** diagram is relatively straightforward to sketch to a high degree of accuracy, is compact and gives an indication of the frequency ranges in which different levels of performance are achieved.

The **Nyquist** diagram provides a rigorous way of determining the stability of a feedback system.

The **Nichols** diagram combines some of the advantages of both of these (although is not quite as good in either specific application) and is widely used in industry. *We shall not study the Nichols diagram in this course(!), but the ideas behind its construction will be readily grasped once the two fundamental diagrams that we do study are understood.*



Consider  $G(j\omega)$  for  $\omega = 2$

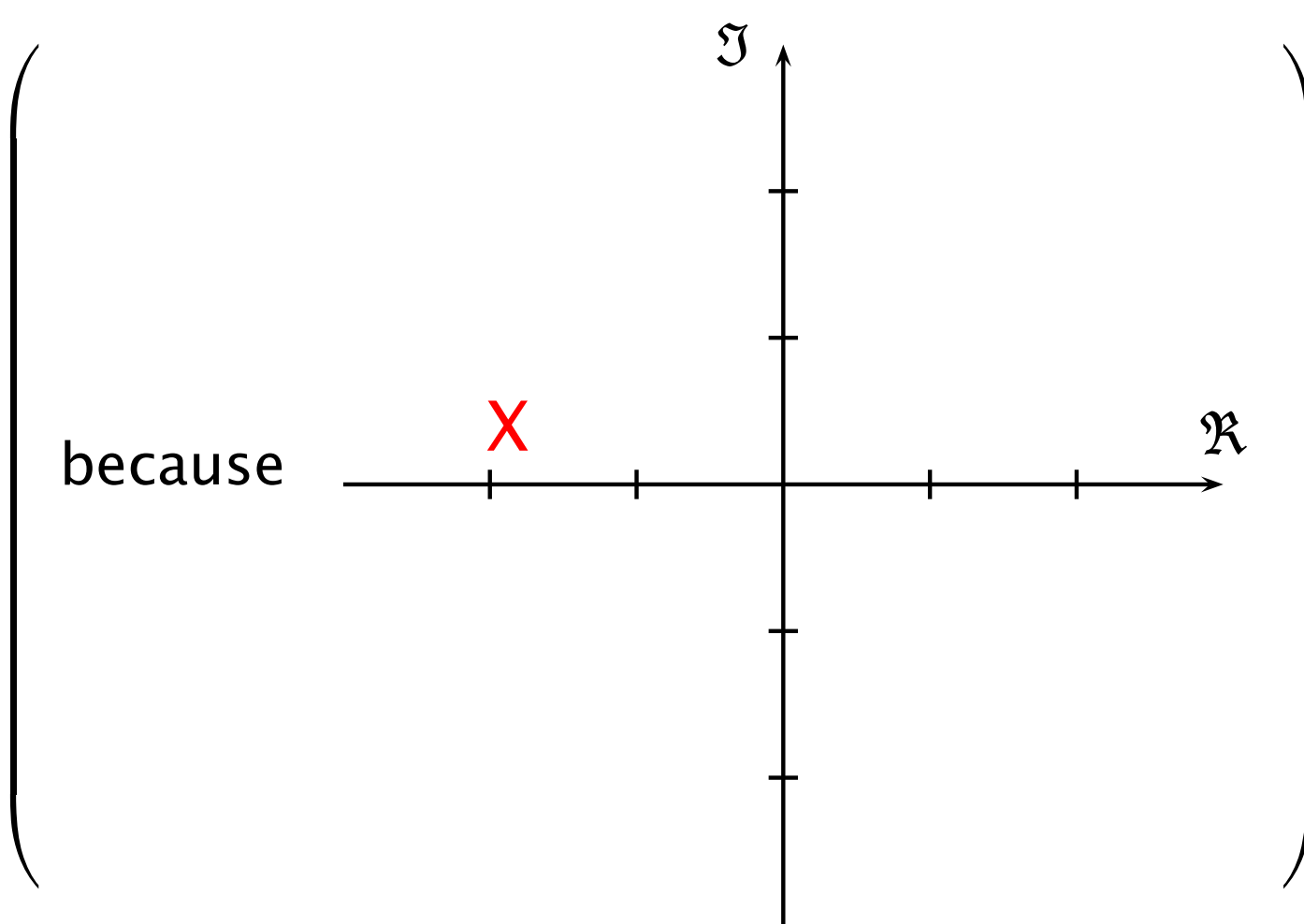
$$G(j\omega) \Big|_{\omega=2} = \frac{1}{2j((2j)^2 + 0.2 \times (2j) + 2)} = \frac{1}{2j(-2 + 0.4j)}$$

Hence

$$|G(j2)| = \frac{1}{2\sqrt{2^2 + 0.4^2}} = 0.2451$$

and

$$\begin{aligned} \arg G(j2) &= \arg 1 - \arg 2j - \arg(-2 + 0.4j) \\ &= 0 - \pi/2 - \underbrace{2.9442}_{\pi - \mathbf{atan(.4/2)}} = -4.5150 \end{aligned}$$



So,

$$G(j2) = 0.2451e^{-4.5150j} = -0.0481 + 0.2404j$$

Also,

$$20\log_{10}|G(j2)| = -12.2dB, \angle G(j\omega) = -258.7^\circ$$

The corresponding point has been marked with a cross on each of the previous plots.

## 4.3 Sketching Bode Diagrams

The bode diagram of  $G(s)$  consists of two curves

1. Gain Plot: Gain  $|G(j\omega)|$  (log) vs freq  $\omega$  (log)
2. Phase Plot: Phase  $\angle G(j\omega)$  (lin) vs  $\omega$  (log)

It is straightforward to sketch, and gives a lot of insight.

**Basic idea:** Consider a transfer function written as a ratio of factorized polynomials e.g.

$$G(s) = \frac{a_1(s)a_2(s)}{b_1(s)b_2(s)}$$

Clearly

$$\log_{10}|G(j\omega)| = \log_{10}|a_1(j\omega)| + \log_{10}|a_2(j\omega)| - \log_{10}|b_1(j\omega)| - \log_{10}|b_2(j\omega)|,$$

so we can compute the gain curve by simply adding and subtracting gains corresponding to terms in the numerator and denominator. Similarly

$$\angle G(j\omega) = \angle a_1(j\omega) + \angle a_2(j\omega) - \angle b_1(j\omega) - \angle b_2(j\omega)$$

and so the phase curve can be determined in an analogous fashion.

Since a polynomial can always be written as a product of terms of the type

$$K, \quad sT, \quad 1 + sT, \quad 1 + 2\zeta Ts + s^2 T^2 \text{ (for } |\zeta| < 1, \text{ i.e. complex roots)}$$

it suffices to be able to sketch Bode diagrams for these terms. The Bode plot of a complex system is then obtained by adding the gains and phases of the individual terms.

**Note:** *Always* rewrite the transfer function in terms of these building blocks before starting to sketch a Bode diagram – you will find it much easier. For example, if the transfer function has a term  $(s + a)$  first rewrite this as  $a \times (1 + s/a)$  and then collect together all the constants that have been pulled out. The transfer functions in Question 6 on Examples Paper 2 are already given in the right form, but you will need to rewrite the transfer function in Question 7.

**Example:** We would rewrite  $G(s) = \frac{1000(s + 1)}{s(s^2 + 5s + 100)}$  as

$$G(s) = \left(\frac{10}{s}\right) \times \frac{(1 + s)}{(1 + 0.05s + s^2/100)}$$

and begin by considering each term individually.

### 4.3.1 Powers of $s$ : $(sT)^k$

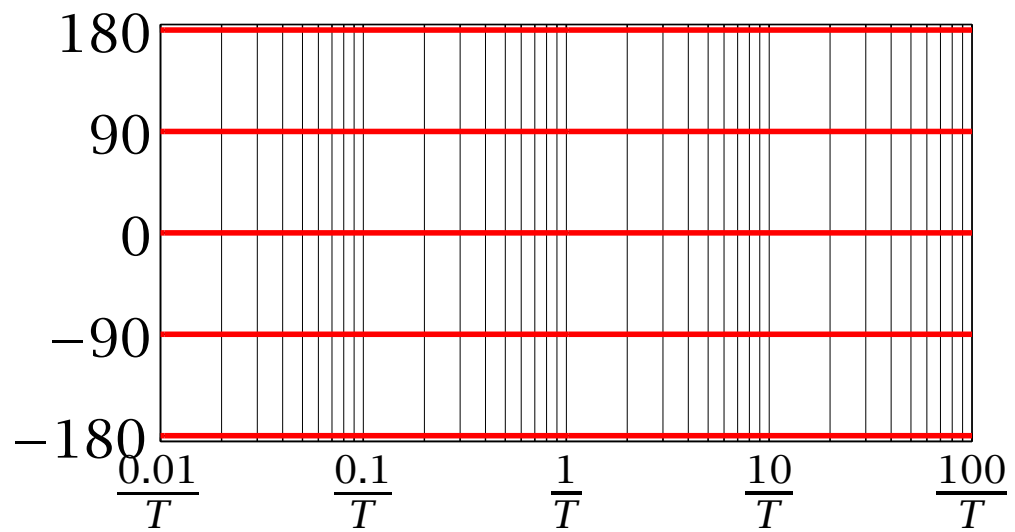
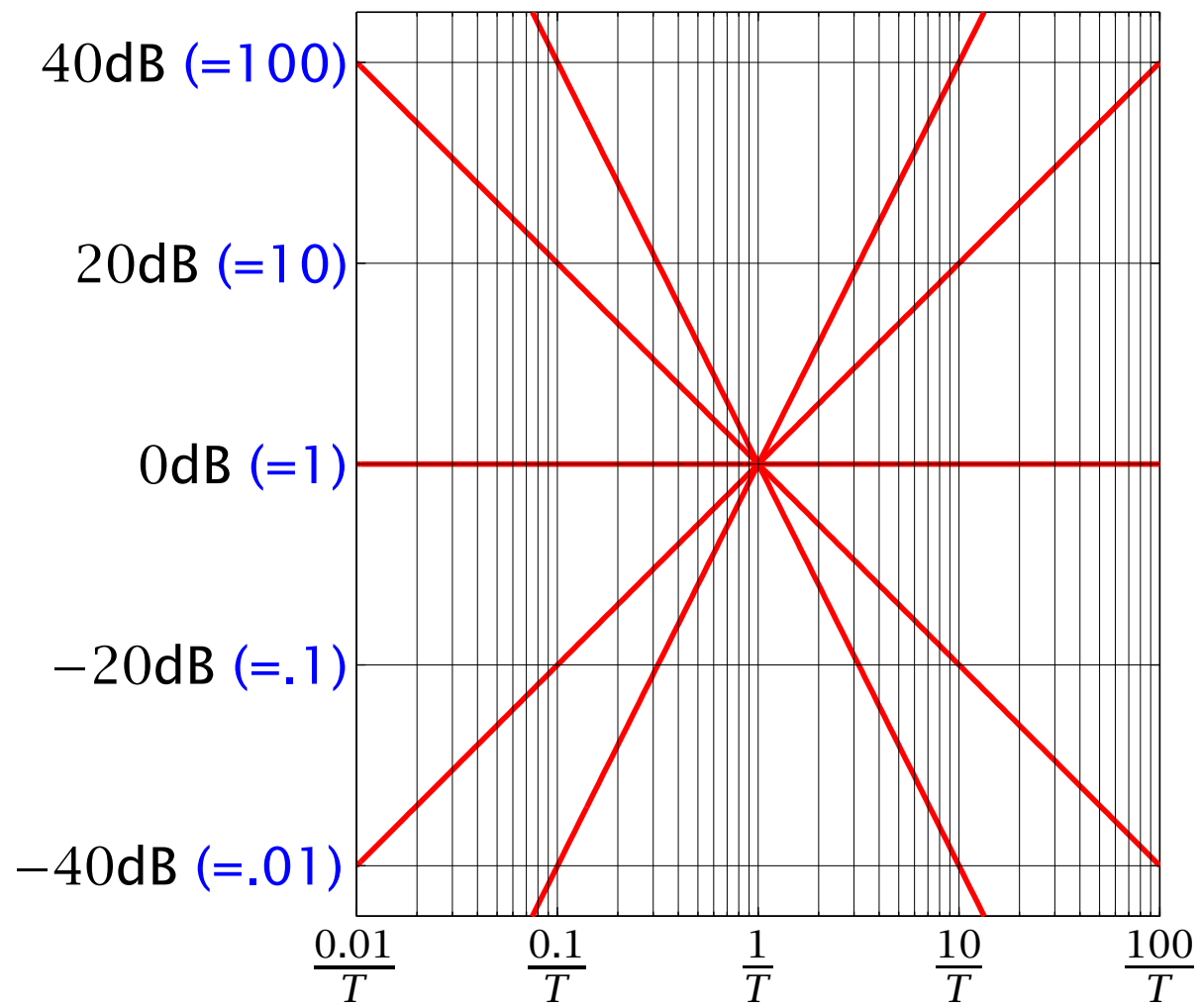
The simplest term in a transfer function is a power of  $s$ , which it is convenient to write in the form

$$a(s) = (sT)^k$$

where  $k > 0$  if the term appears in the numerator and  $k < 0$  if the term is in the denominator. The magnitude and phase of the term are given by

$$\log_{10}|a(j\omega)| = \log_{10}(\omega T)^k = k\log_{10}(\omega T), \quad \angle G(j\omega) = 90k^\circ$$

The gain curve is thus a straight line with slope  $k$  decades/decade, or  $20k$  dB/decade, intersecting the 0dB line at  $\omega T = 1$ . The phase curve is a constant at  $90^\circ \times k$ . For  $T = 1$ , the case when  $k = 1$  corresponds to a differentiator, and has a slope 20dB/decade and phase  $90^\circ$ . The case when  $k = -1$  corresponds to an integrator and has a slope  $-20$ dB/decade and phase  $-90^\circ$ .



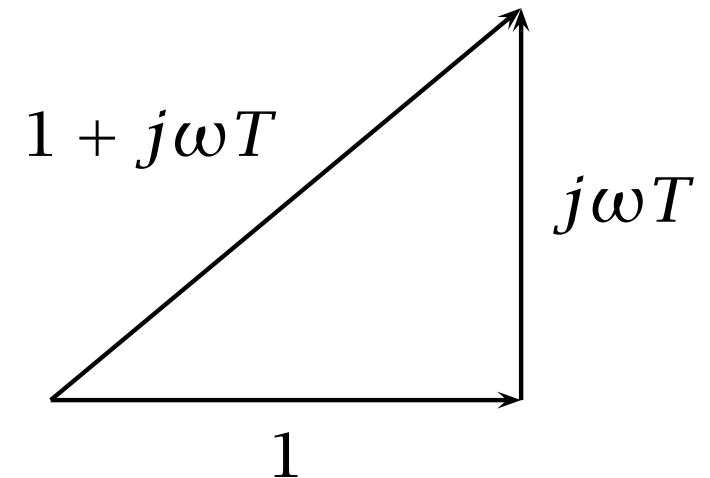


## 4.3.2 First Order Terms: $(1 + sT)$

Bode plot of  $G(s) = (1 + sT)$  (for  $T > 0$ )

... replace  $s$  by  $j\omega$  to get  $G(j\omega) = (1 + j\omega T)$

$$\begin{aligned}\Rightarrow |G(j\omega)| &= \underbrace{|1 + j\omega T|}_{\sqrt{1 + \omega^2 T^2}} \\ \angle G(j\omega) &= \underbrace{\angle(1 + j\omega T)}_{\text{atan}(\omega T)}\end{aligned}$$



Asymptotes:

$\omega \rightarrow 0$ : (i.e.  $\omega \ll 1/T$ )

$$20\log_{10}|G(j\omega)| \rightarrow 20\log_{10}1 = 0$$

$$\angle G(j\omega) \rightarrow \angle 1 = 0$$

$\omega \rightarrow \infty$ : (i.e.  $\omega \gg 1/T$  )

$$\begin{aligned} 20\log_{10}|G(j\omega)| &\rightarrow 20\log_{10}|j\omega T| \\ &= 20\log_{10}\omega - 20\log_{10}1/T \end{aligned}$$

(which is a straight line with slope=20dB/decade and x-axis (i.e. 0db) intercept at  $\omega = 1/T$ )

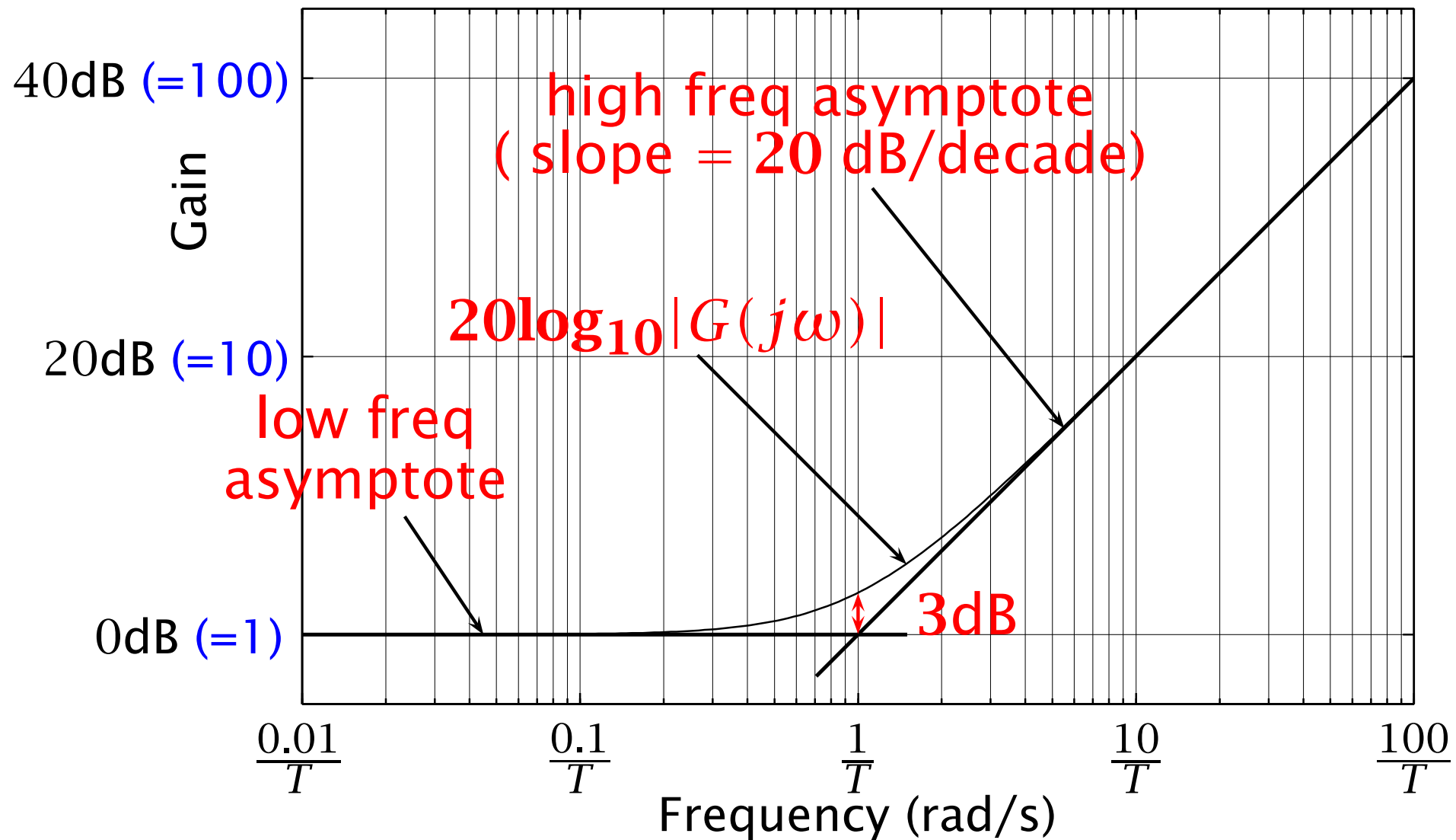
$$\angle G(j\omega) \rightarrow \angle j\omega T = 90^\circ$$

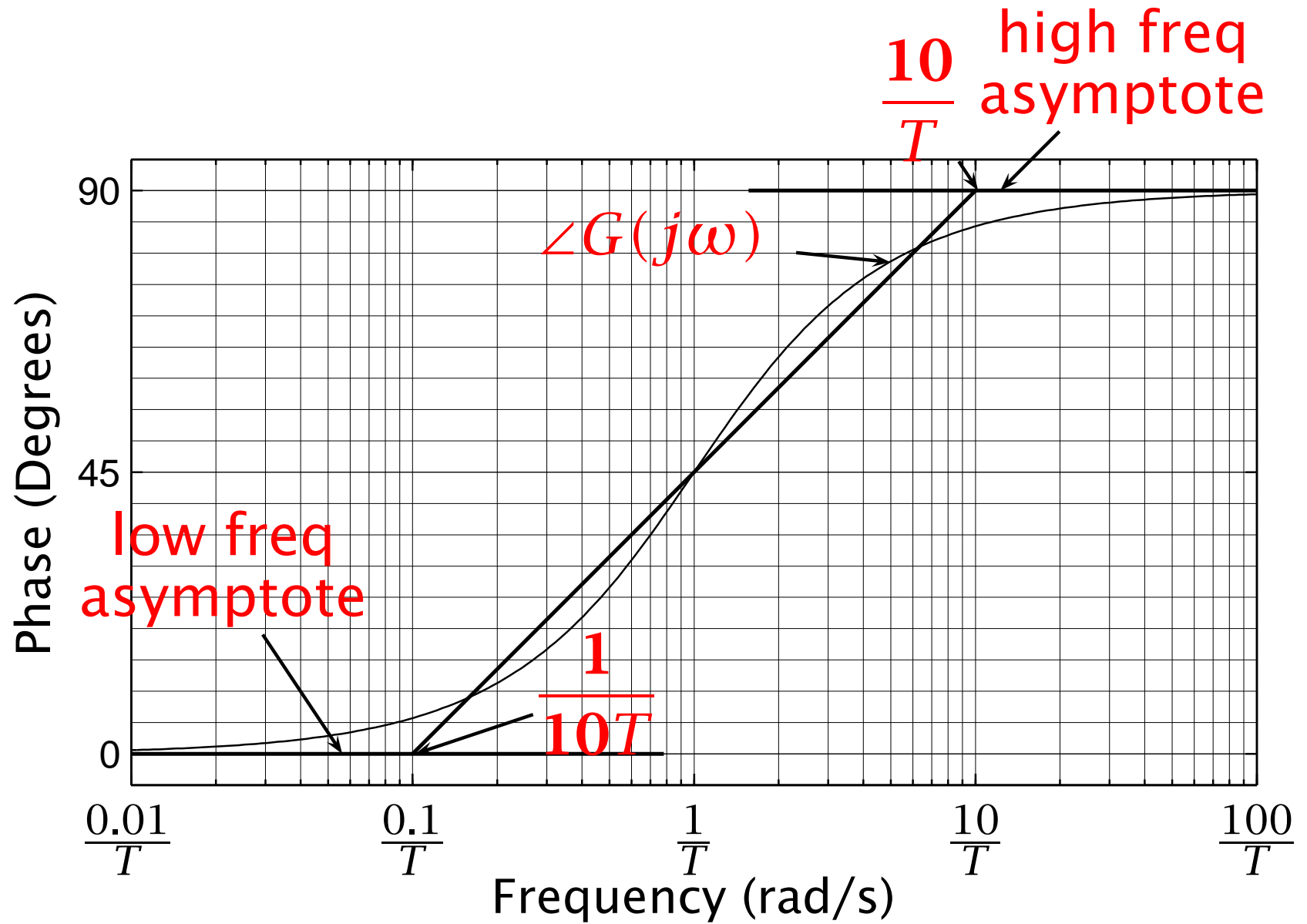
At  $\omega = 1/T$ , we get

$$\begin{aligned} 20\log_{10}|G(j\omega)| &= 20\log_{10}|1 + j| \\ &= 20\log_{10}\sqrt{2} \quad (3\text{dB}) \end{aligned}$$

$$\angle G(j\omega) = \angle(1 + j) = 45^\circ$$

Bode diagram of  $G(s) = (1 + sT)$ :





### 4.3.3 Second order terms: $(1 + 2\zeta sT + s^2T^2)$

Bode plot of  $G(s) = \frac{1}{1 + 2\zeta sT + s^2T^2}$  (for  $T > 0, 0 \leq \zeta \leq 1$ )

... replace  $s$  by  $j\omega$  to get  $G(j\omega) = \frac{1}{1 + 2\zeta j\omega T - \omega^2T^2}$

$$\Rightarrow 20\log_{10}|G(j\omega)| = -20\log_{10} |1 - \omega^2T^2 + 2\zeta j\omega T|$$

$$\angle G(j\omega) = -\angle (1 - \omega^2T^2 + 2\zeta j\omega T)$$

Asymptotes:

$\omega \rightarrow 0$ : (i.e.  $\omega \ll 1/T$ )

$$20\log_{10}|G(j\omega)| \rightarrow -20\log_{10}1 = \mathbf{0}$$

$$\angle G(j\omega) \rightarrow -\angle 1 = \mathbf{0}$$

$\omega \rightarrow \infty$ : (i.e.  $\omega \gg 1/T$  )

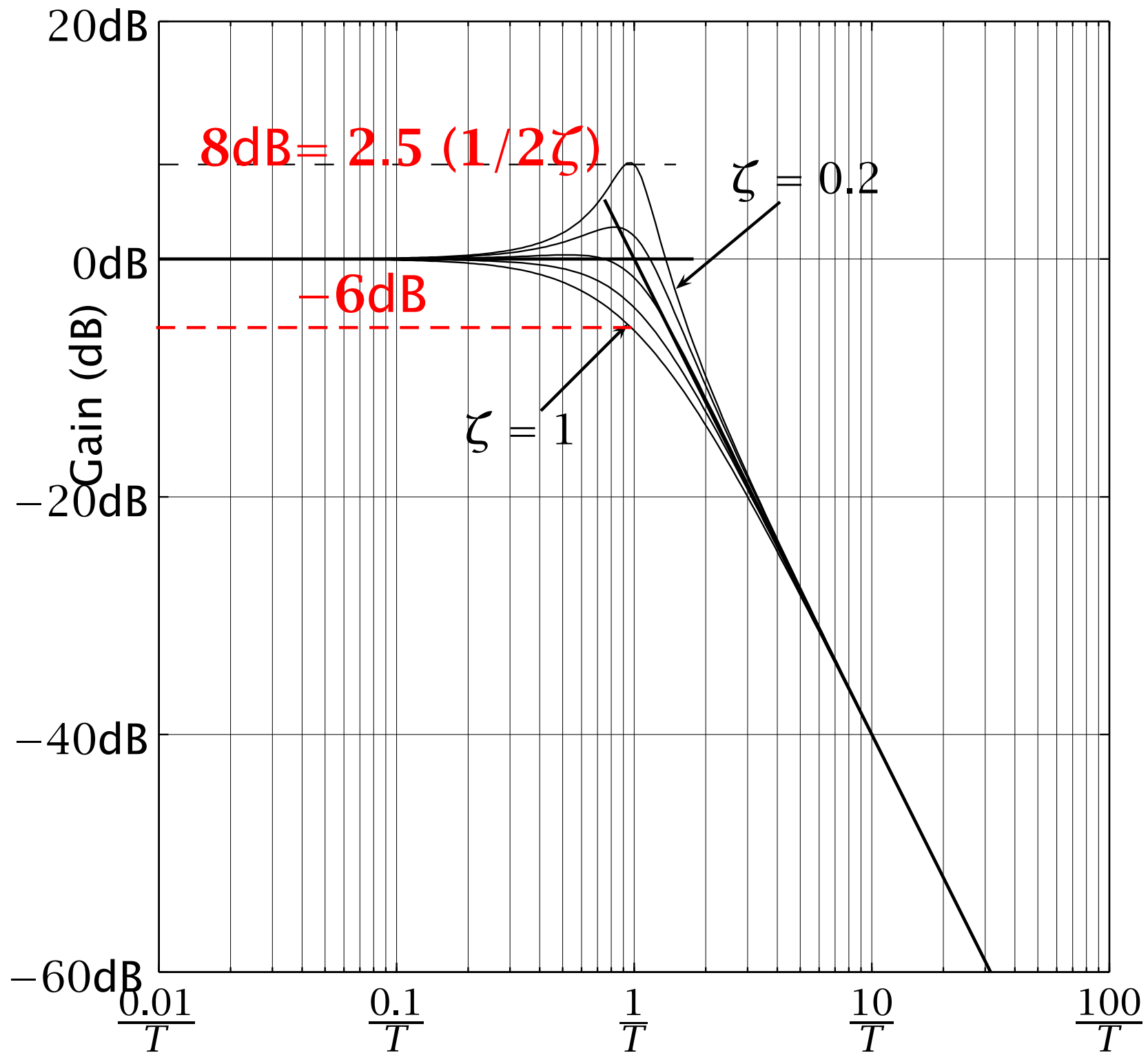
$$\begin{aligned} 20\log_{10}|G(j\omega)| &\rightarrow -20\log_{10}|-\omega^2 T^2| \\ &= -40\log_{10}\omega T \\ &= 40\log_{10}1/T - 40\log_{10}\omega \end{aligned}$$

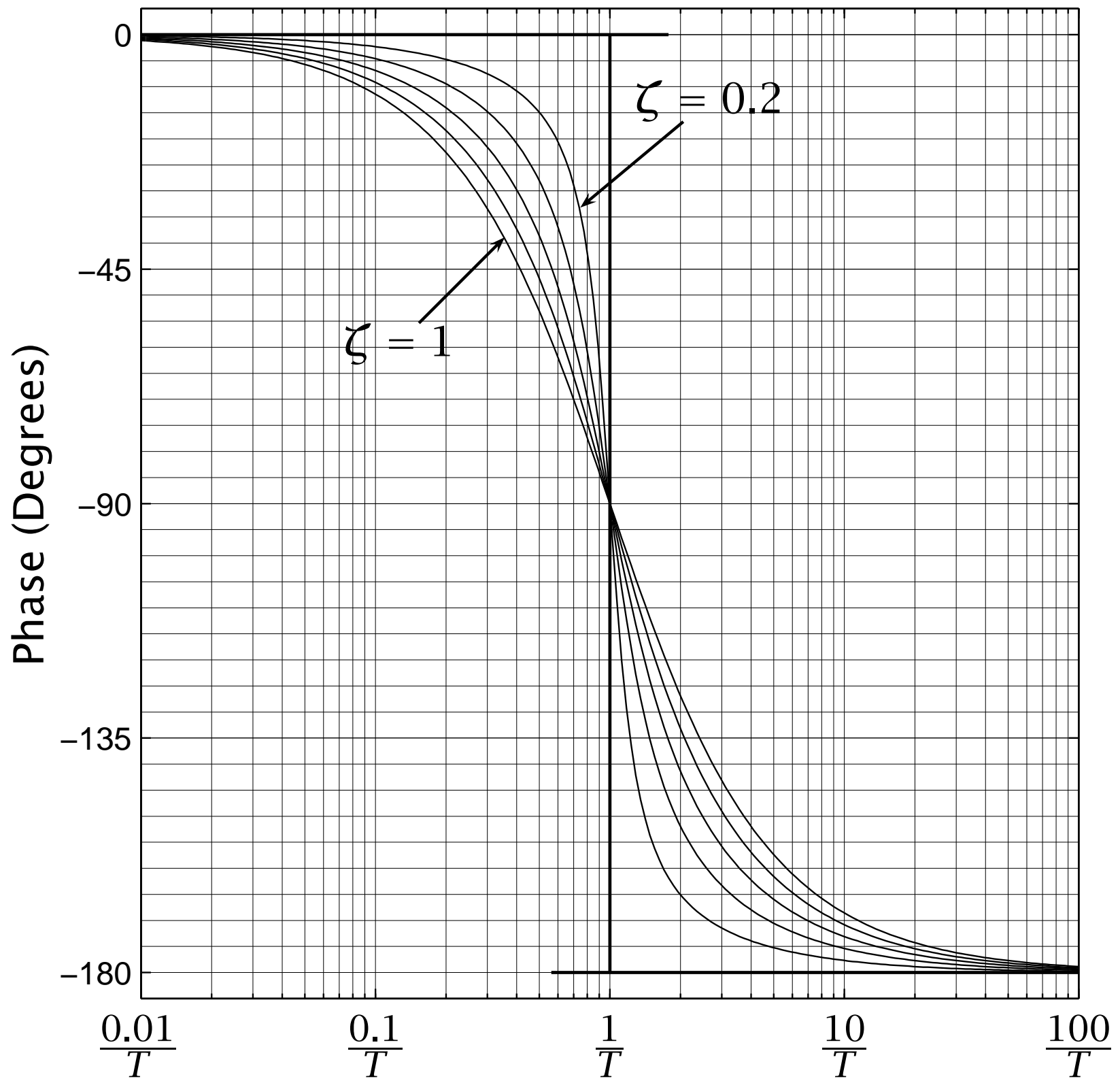
(which is a straight line with slope =  $-40\text{dB/decade}$  and  $x$ -axis (i.e.  $0\text{db}$ ) intercept at  $\omega = 1/T$ )

$$\angle G(j\omega) \rightarrow -\angle -\omega^2 T^2 = -180^\circ$$

At  $\omega = 1/T$ , we get

$$\begin{aligned} 20\log_{10}|G(j\omega)| &= -20\log_{10}|2\zeta j| \\ &= 20\log_{10}\frac{1}{2\zeta} \\ \angle G(j\omega) &= -\angle(2\zeta j) = -90^\circ \end{aligned}$$







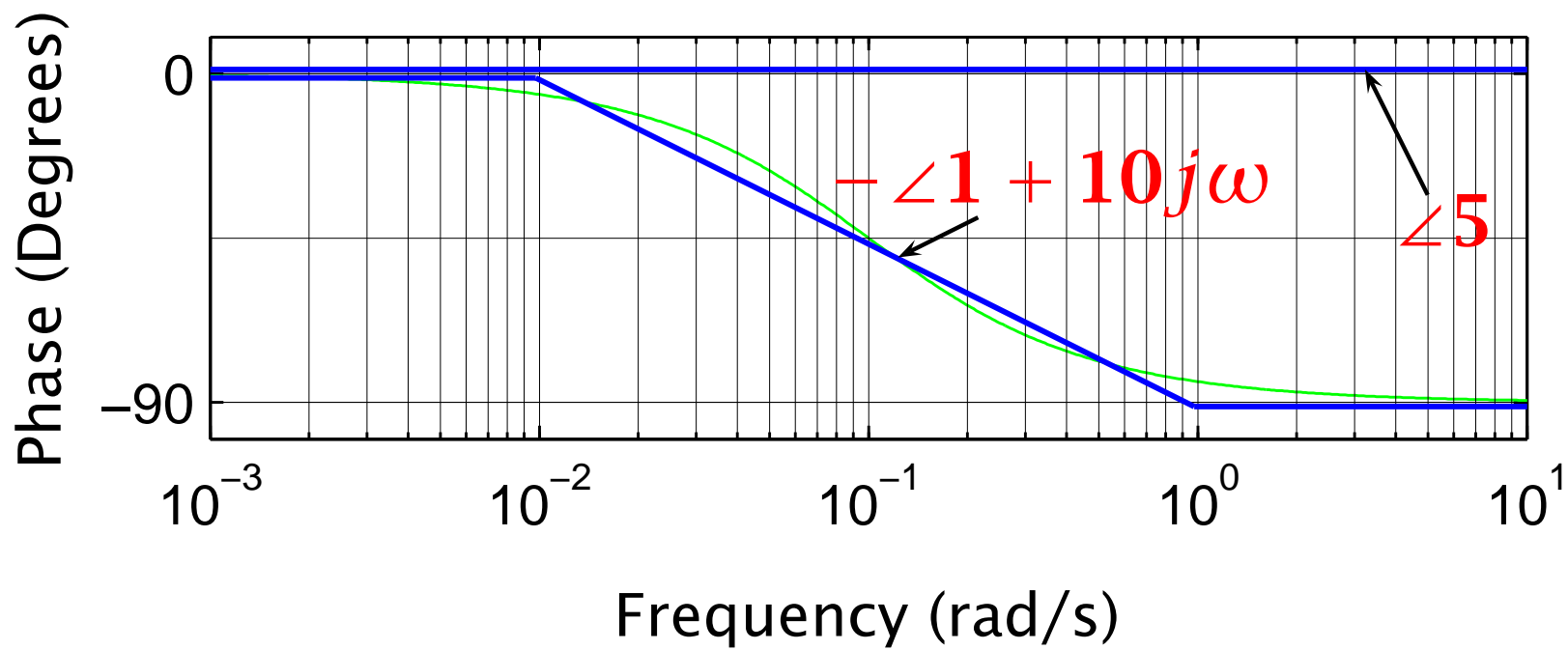
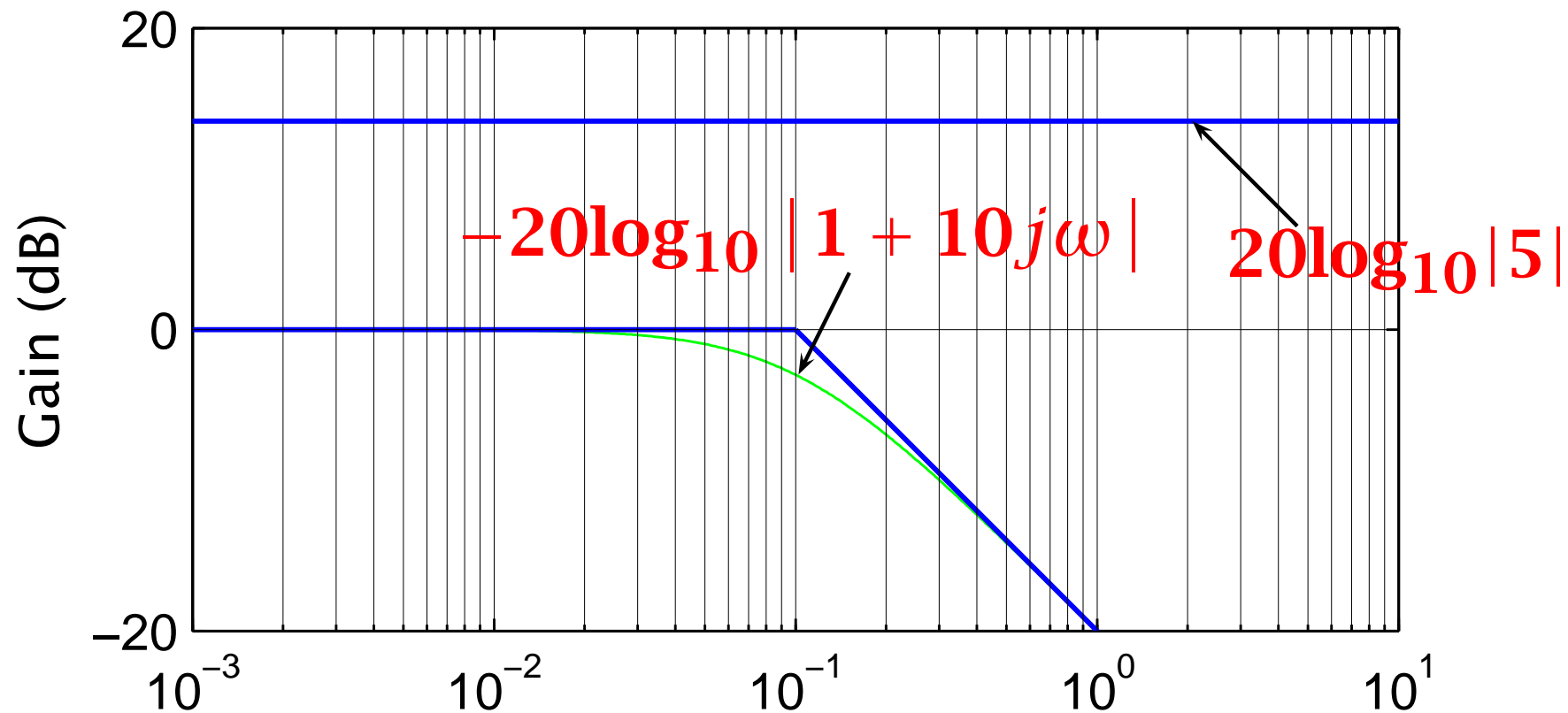
## 4.3.4 Examples

**Example 1:**  $G(s) = \frac{5}{1 + 10s}$  ( $K = 5, 1/T = 0.1$ )

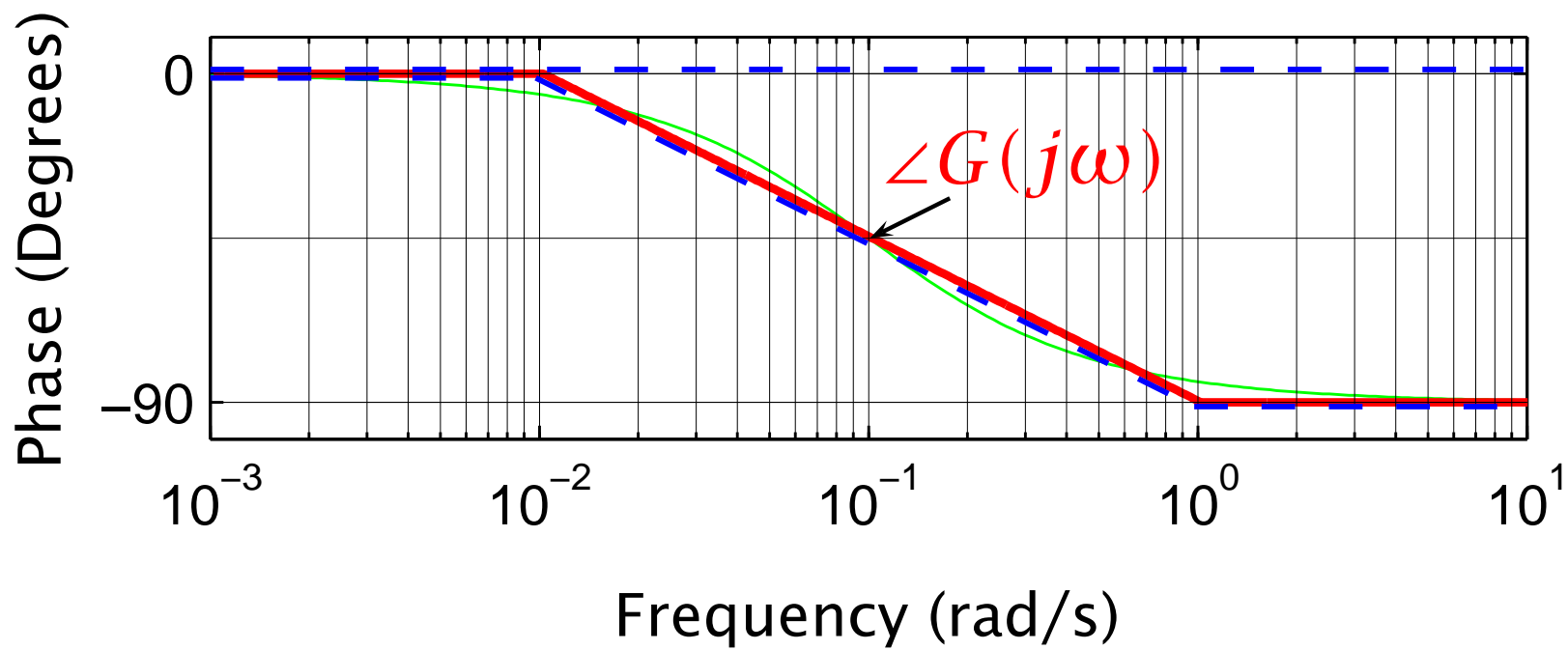
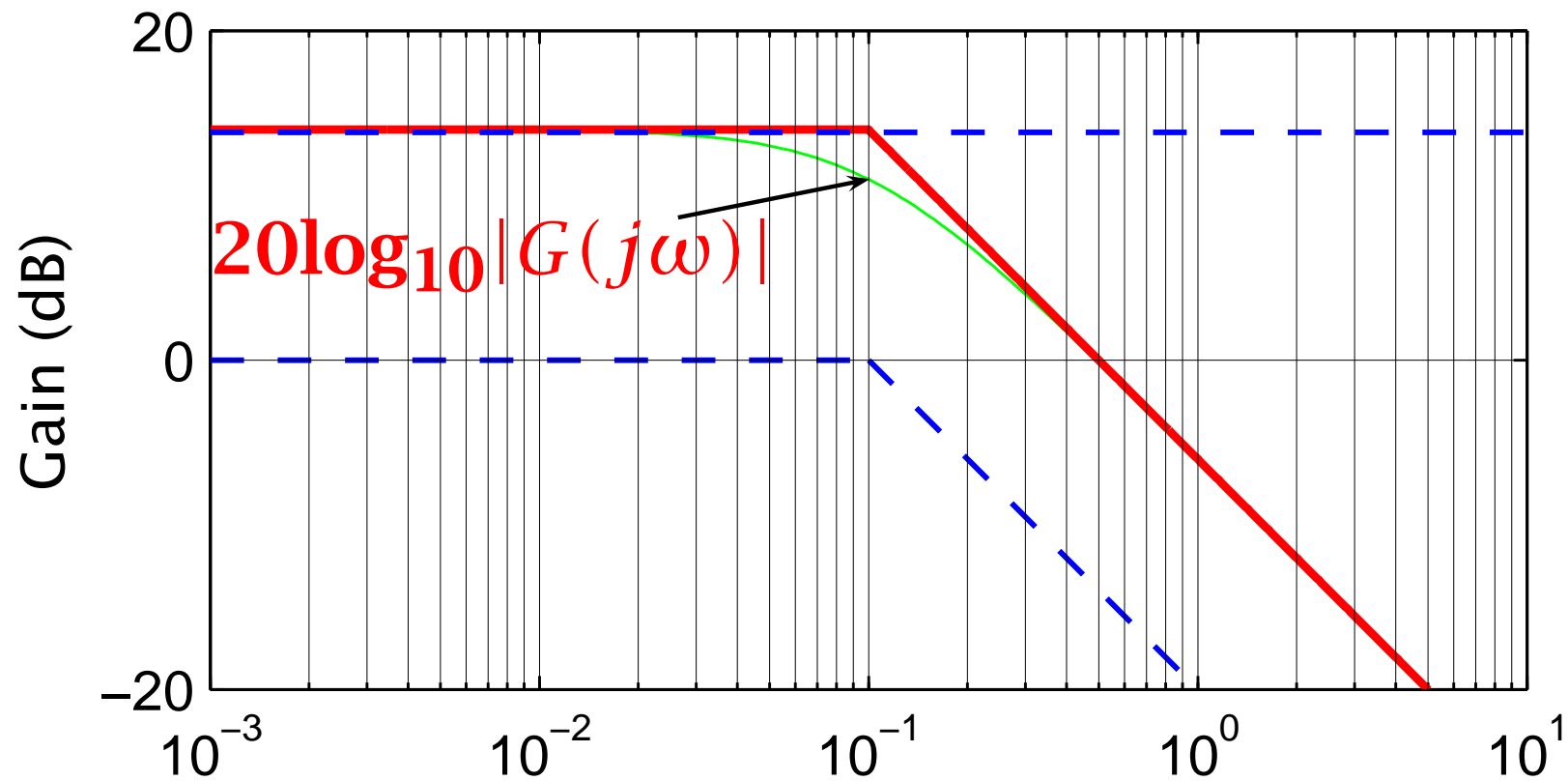
$$20\log_{10}|G(j\omega)| = 20\log_{10}5 - 20\log_{10}|1 + j\omega/0.1|$$

$$\angle G(j\omega) = \angle 5 - \angle(1 + j\omega/0.1)$$

We now produce a sketch of the Bode diagram in two stages (this is for clarity – all these constructions would normally appear on one pair of graphs ). First we plot the asymptotes and approximations to the true curves for the individual terms, using the 3dB error at the corner and  $10/T, 1/10T$  approximations. (The exact values are used for the plots here.)



In the next pair of diagrams, the contributions from the individual terms (now shown as dashed lines) have been added to give the Bode diagram of  $G(s)$  (this has been done for both the asymptotes and the true gain and phase).



The next example has both a pole and a zero – it is an example of a “phase-lead compensator”.

**Example 2:**  $G(s) = 0.05 \frac{1 + 10s}{1 + s}$

So,  $G(j\omega) = 0.05 \frac{1 + 10j\omega}{1 + j\omega}$ ,

$$20\log_{10}|G(j\omega)| = 20\log_{10}0.05 + 20\log_{10}|1 + 10j\omega| - \underline{20}\log_{10}|1 + j\omega|$$

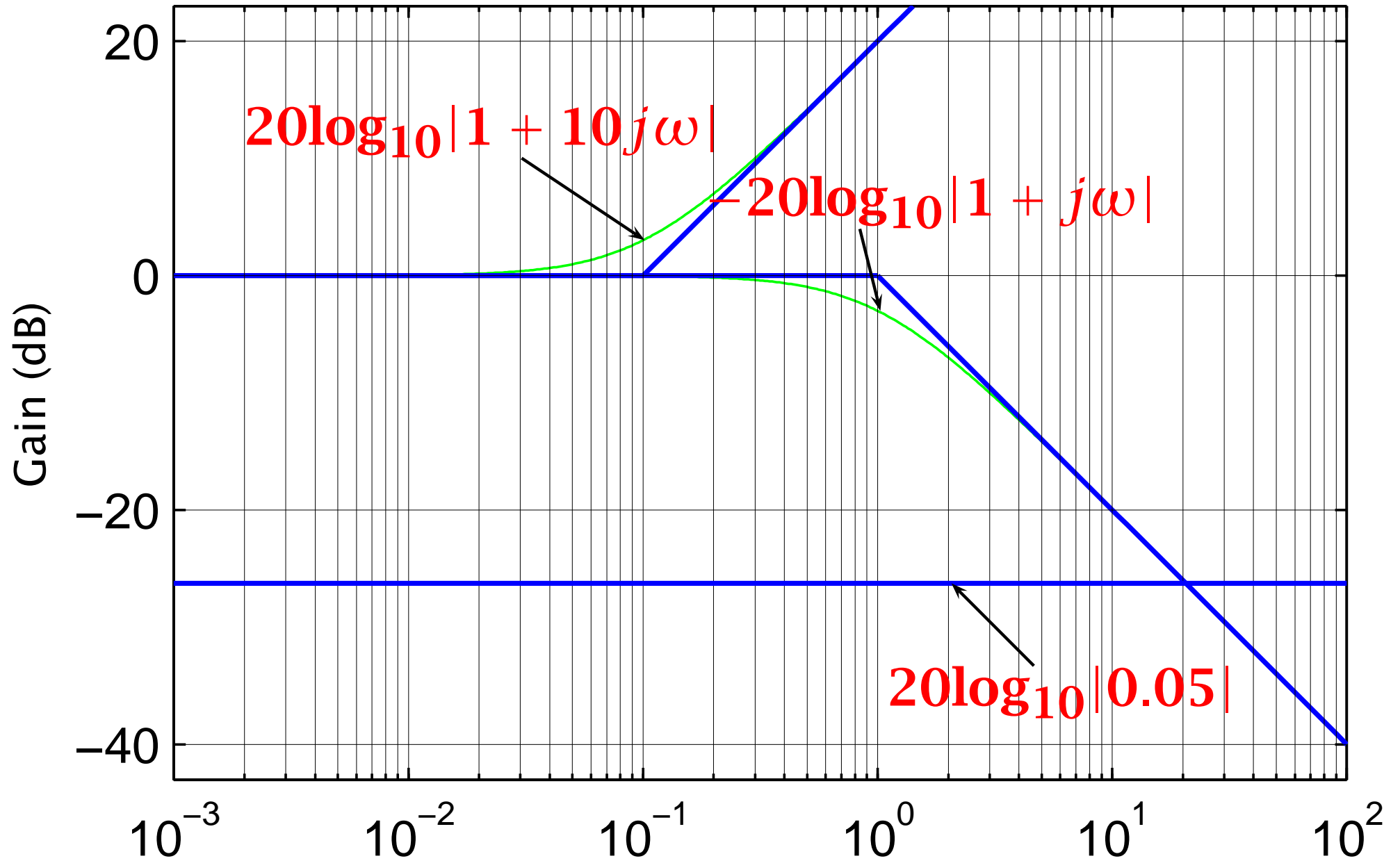
**Note:  $0.05 = -26dB$**

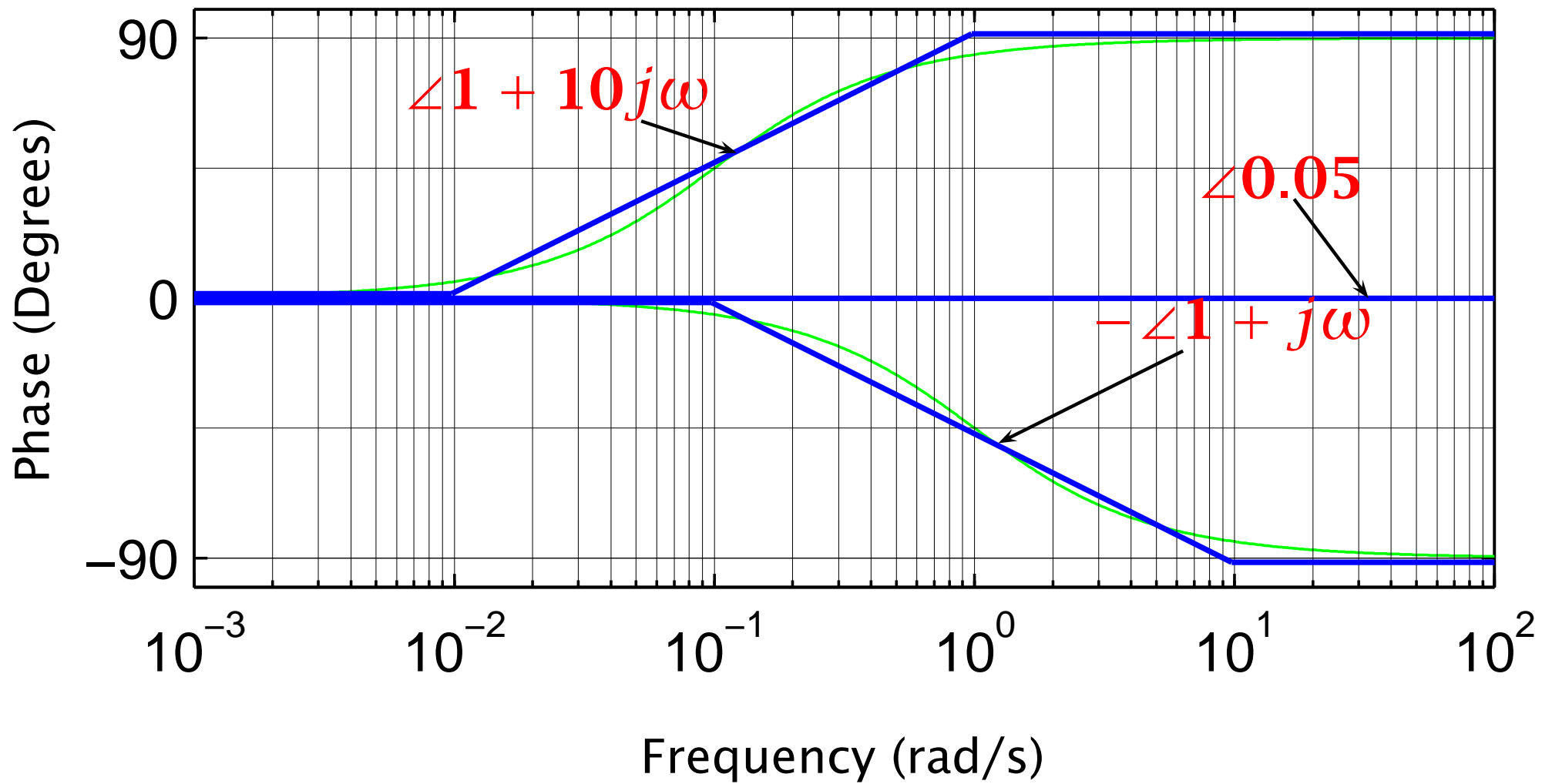
and

$$\angle G(j\omega) = \underbrace{\angle 0.05}_0 + \angle(1 + 10j\omega) - \angle(1 + j\omega)$$



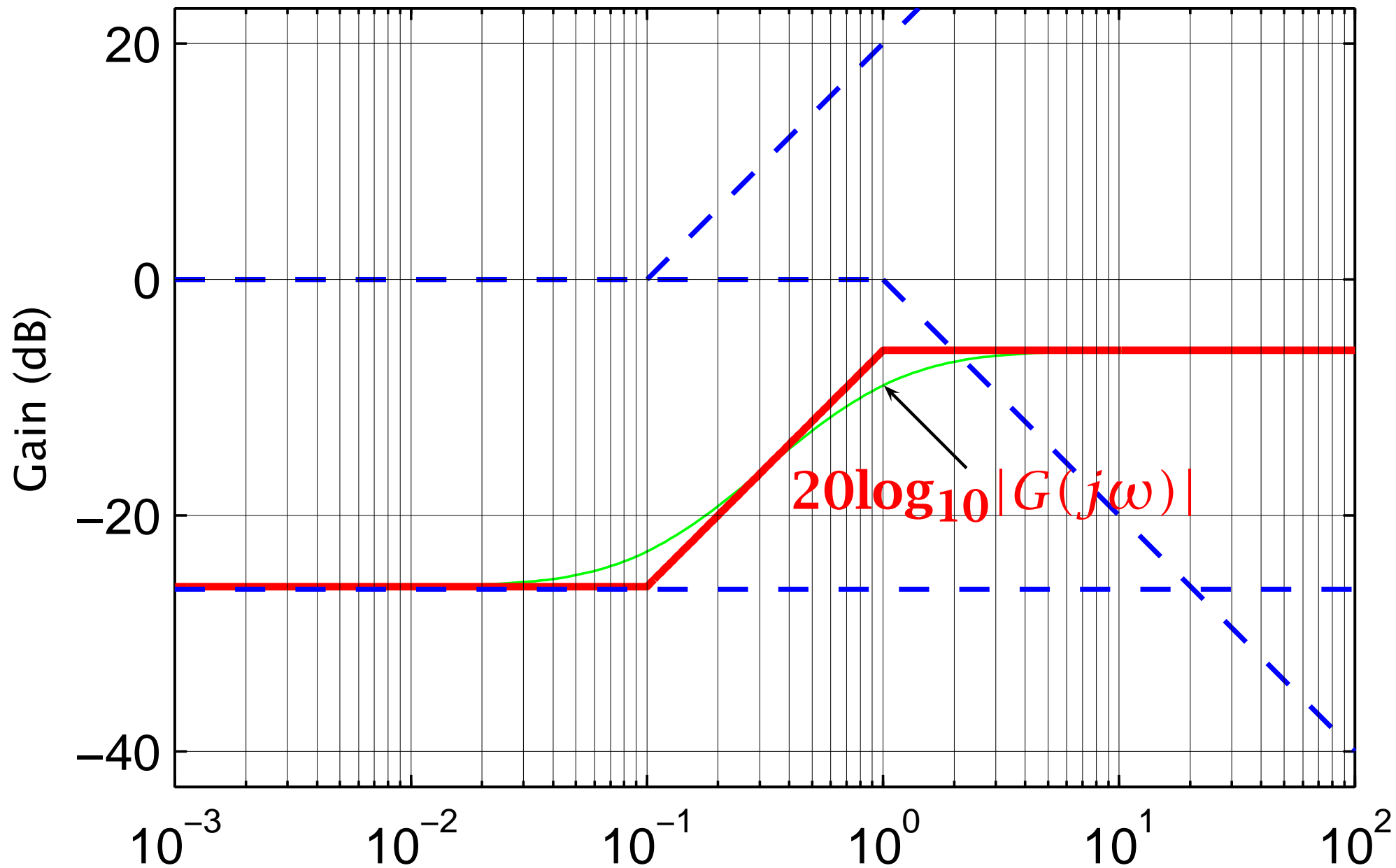
First we draw the individual terms:

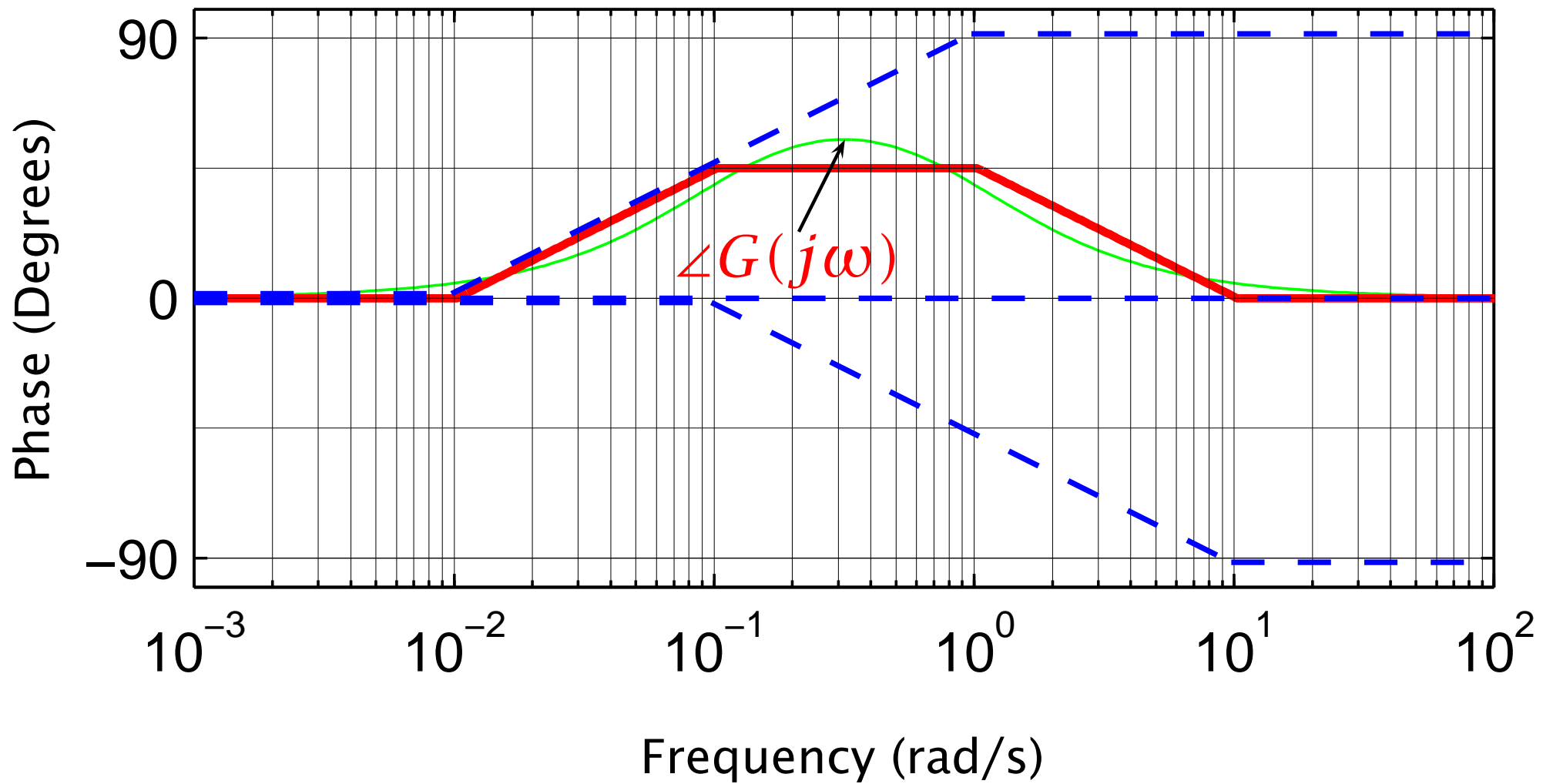




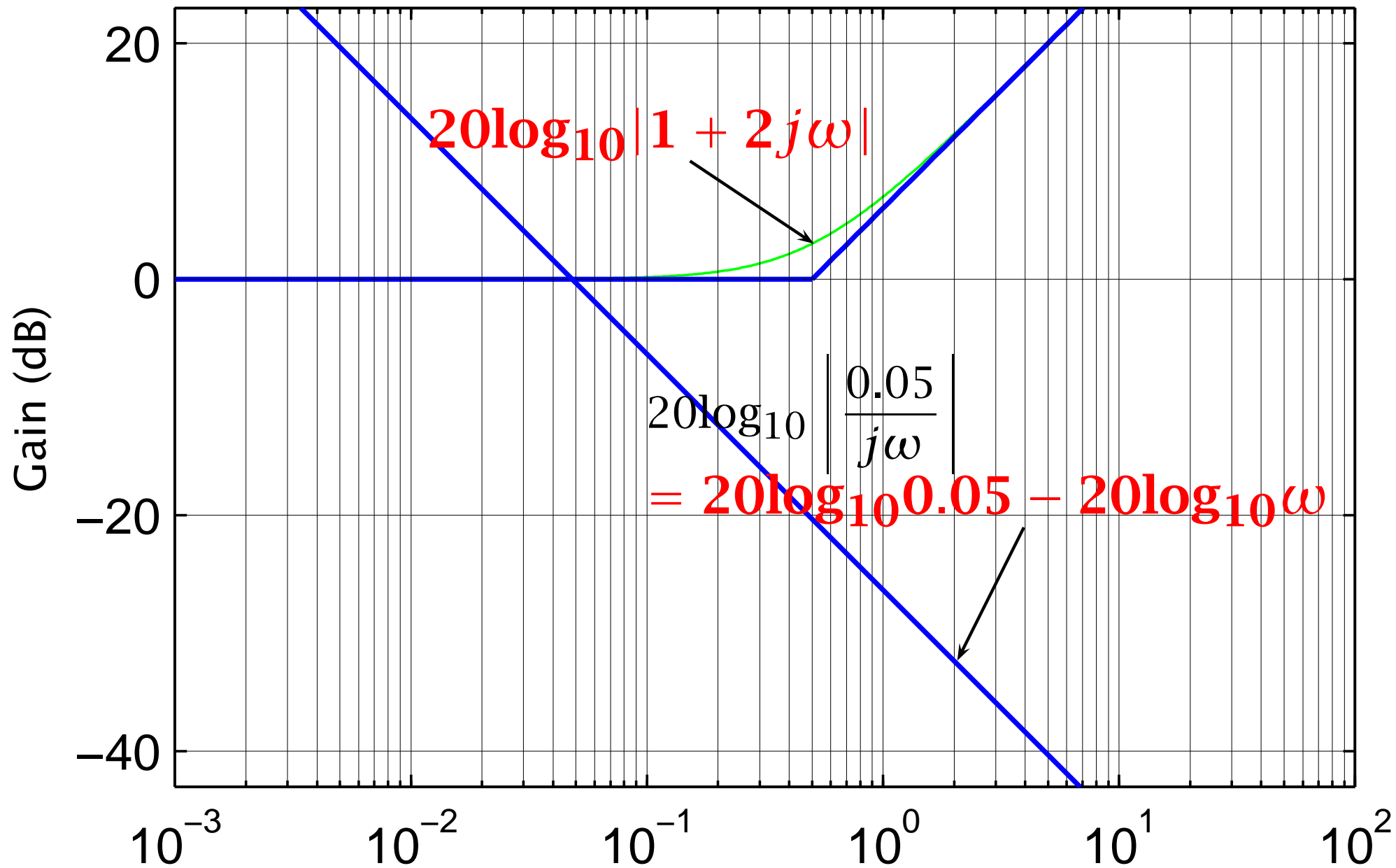


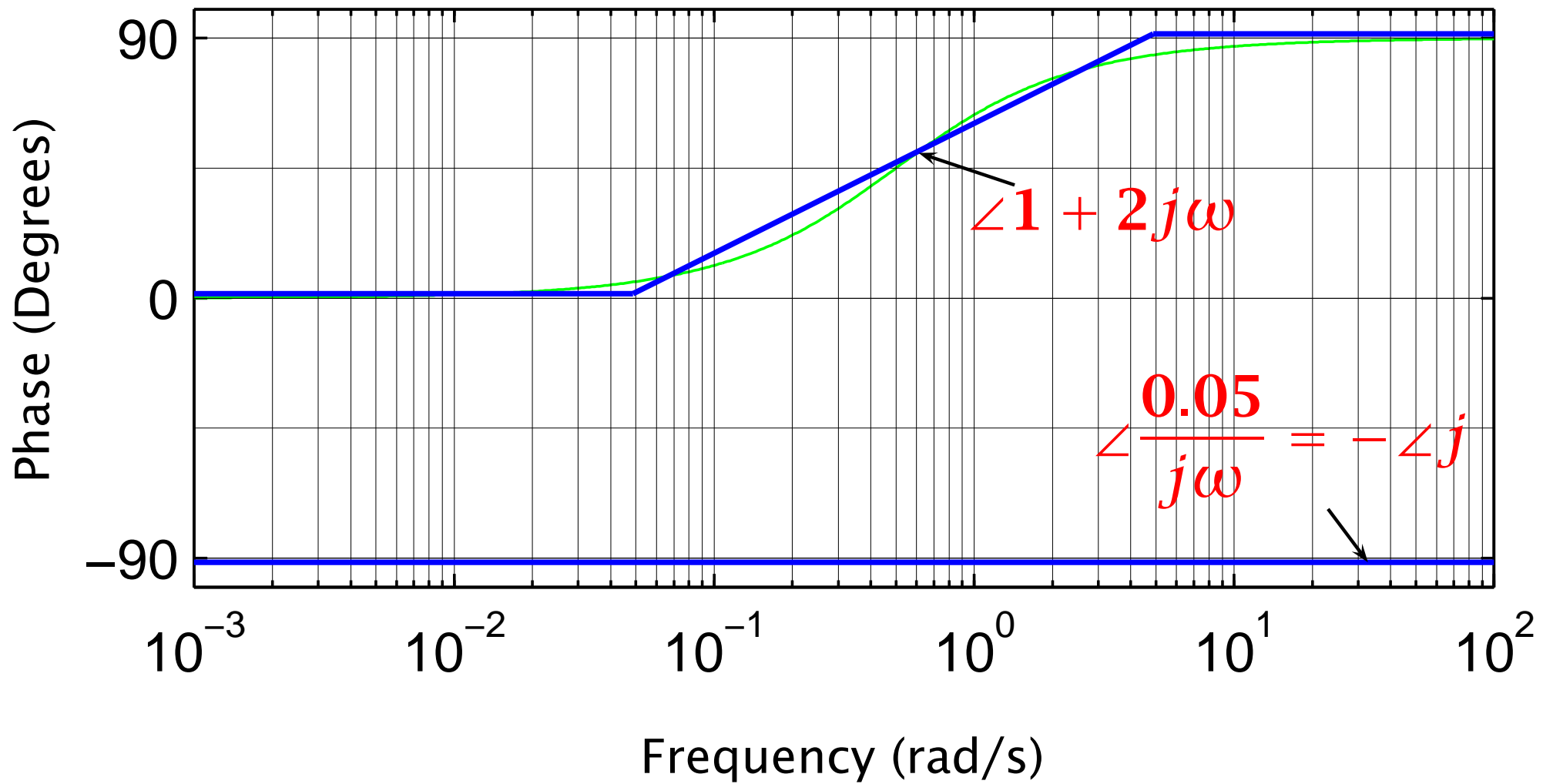
and then we sum them (Note how the phase terms sum to produce a maximum phase advance of only about  $55^\circ$ .)

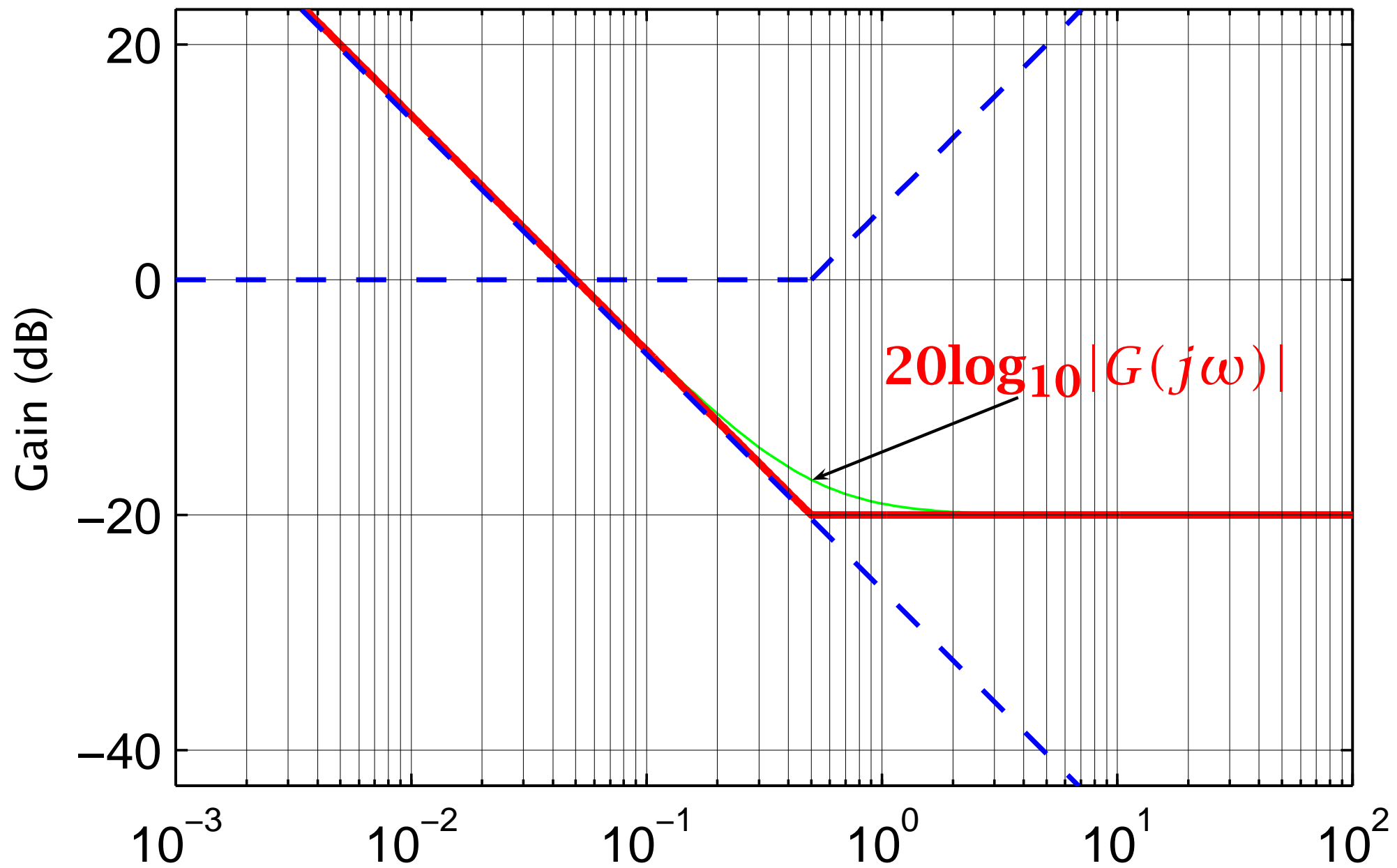


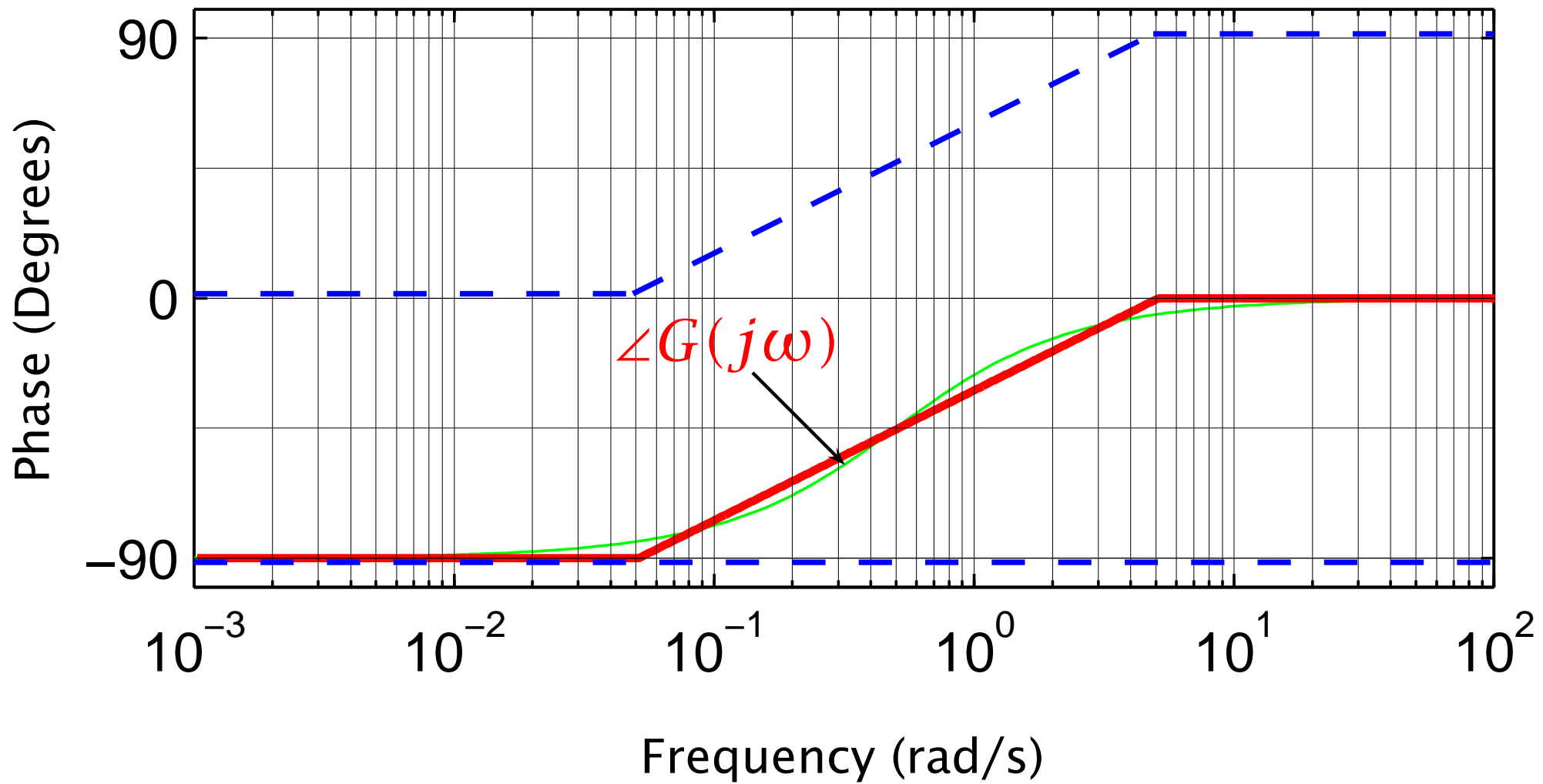


**Example 3:**  $G(s) = 0.05 \frac{1 + 2s}{s} = \frac{0.05}{s} \times (1 + 2s)$









## RHP poles and zeros

$$\angle(1 - j\omega T) = - \angle(1 + j\omega T)$$

$$20\log_{10} |(1 - j\omega T)| = + 20\log_{10} |(1 + j\omega T)|$$

That is, if we have a term  $(1 - sT)$  instead of  $(1 + sT)$  then the gain plot is unchanged but the term's contribution to the phase plot is reversed in sign (so the contribution of a RHP zero to the overall phase diagram is the same as that of a LHP pole at the same location).

## Comments on Bode sketching

A alternative technique for Bode diagrams would be to ignore the asymptotes, and just calculate and plot the true gain and phase over a grid of frequencies. This is *not* recommended for a number of reasons. Firstly, a lot more points are required to get the same accuracy (particularly when the diagram is to be used for control system analysis and design, as only a small region is required accurately in this case). Secondly, the structure of the diagram is then lost. A practising control engineer will often prefer a good sketch, with the asymptotes shown, to an accurate computer generated diagram – since this gives a better idea of how things can be changed to improve the behaviour of the controlled system.

When a question asks you to “draw” a Bode diagram (as in the questions on Examples Paper 2) it’s really asking you to produce a drawing showing the straight line asymptotes and approximations and a rough approximation to the true gain and phase by rounding the corners appropriately.



## 4.4 Key Points

- The frequency response is obtained from the transfer function by replacing  $s$  with  $j\omega$ .
- At each frequency  $\omega$ ,  $G(j\omega)$  is a complex number whose magnitude gives the gain of the system at that frequency and whose argument gives the phase shift of the system at that frequency.
- The gain and the phase shift are conveniently shown on the Bode diagram.